










# Let's Use a Street Map

A street map shows where places are located on certain streets.  
Look at the map, and use your compass to answer the questions below.



	King Drive		Red Road	
				
	High Street		Main Street	

⇒ Look at the street map above. Then read the sentences below. Circle the correct direction to complete each one.

- The town clock is \_\_\_\_\_ of the fire station.      N      S      E      W
- The pumpkin store is \_\_\_\_\_ of the school.      N      S      E      W
- The pink house is \_\_\_\_\_ of the church.      N      S      E      W
- The park is \_\_\_\_\_ of the blue house.      N      S      E      W
- The blue house is \_\_\_\_\_ of the school.      N      S      E      W

⇒ Read the sentences below. Use the map to write a direction and a name to complete each sentence.

- To get from the library to the pink house, go \_\_\_\_\_ on \_\_\_\_\_ Street for 2 blocks.
- To get from the church to the town clock, go \_\_\_\_\_ on \_\_\_\_\_ Street for 2 blocks.
- To get from the pumpkin store to the park, go \_\_\_\_\_ on \_\_\_\_\_ Street for 1 block.
- To get from the blue house to the school, go \_\_\_\_\_ on \_\_\_\_\_ Road for 2 blocks.
- To get from the blue house to the church, go \_\_\_\_\_ on \_\_\_\_\_ Drive for 2 blocks.