


Name: _____


1. Before counting your jelly beans:

Predict how many of each color will be found in your set of jelly beans. Write your answers below each color.



Green	Orange	Pink	Purple	Red	Yellow	White

2. Open your set of jelly beans:




Answer each question below.

1. How many jelly beans do you have altogether?	
2. How many green jelly beans do you have?	
3. How many orange beans do you have?	
4. How many pink beans do you have?	
5. How many purple jelly beans do you have?	
6. How many red jelly beans do you have?	
7. How many yellow jelly beans do you have?	
8. How many white jelly beans do you have?	
9. Which color do you have the most of?	
10. Which color do you have the least of?	
Look at your predictions. How many of your predictions match the number of jelly beans you have for each color?	



Graph the Jelly Beans!



10							
9							
8							
7							
6							
5							
4							
3							
2							
1							
0	Green	Orange	Pink	Purple	Red	Yellow	White